
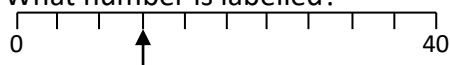

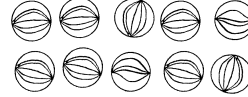




Name: _____

Date: _____

Class/Group: _____

A: Place Value, Add and Subtract		B: Multiply, Divide and Fractions		C: Measure and Problem Solving	
1. What is the missing number? 0 <input type="text"/> 8 12 16	3:1	11. $36 \div 4 =$	3:10	23. How many centimetres are in one and a half metres?	3:19
2. What is the 8 worth in this number? 183	3:2	12. $8 \times 8 =$	3:10		
3. Write this number in numerals. two hundred and fifty	3:3	13. Use $12 \times 3 = 36$ to solve: $24 \times 3 =$	3:11	22. The sides of a square are 4cm. What is the perimeter of the square? 	3:20
4. What number is labelled? 	3:4	14. What is the missing number? $7 \times \text{input} = 82 - 12$	3:12		
5. Make the largest number possible using the digits 2 7 5.	3:5	15. What is the missing number? 0.7 0.8 0.9 <input type="text"/> 1.1	3:13	23. I had £1. I bought 2 cartons of drink and got 30p change. How much did each carton of drink cost? 	3:21
6. $890 + 10 =$	3:6	16. Circle $\frac{2}{10}$ of the marbles. 	3:14		
7. $436 - 123 =$	3:7	17. What is $\frac{1}{3}$ of 12?	3:15	24. Draw the hands to show five minutes past four o'clock 	3:22
8. Circle the best estimate to $59 + 39$: 80 90 100 110	3:8	18. $\frac{2}{6} = \frac{?}{3}$ 	3:16		
9. One orange costs nineteen pence. How much will three oranges cost?	3:9	19. Add the fractions. $\frac{2}{5} + \frac{1}{5}$	3:17	25. How many seconds are in two minutes?	3:24
10. What is the missing number? <input type="text"/> - 19 = 13	3:9	20. Write the largest fraction. $\frac{1}{5}$ $\frac{1}{6}$ $\frac{1}{4}$ $\frac{1}{2}$	3:18		
Total (A)		Total (B)		Total (C)	
Test Total (A+B+C)		R (0-9)		Y (10-19)	
				G (20-25)	